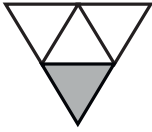


Name _____

Date _____

Whisper the fraction of the shape that is shaded. Then, match the shape to the amount that is not shaded.

1.



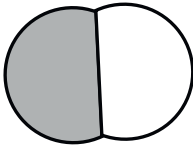
- 9 tenths

2.



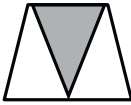
- 4 fifths

3.



- 10 elevenths

4.



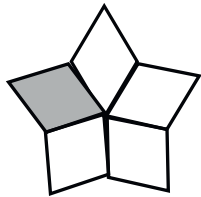
- 5 sixths

5.



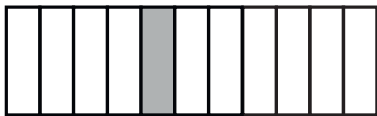
- 1 half

6.



- 2 thirds

7.



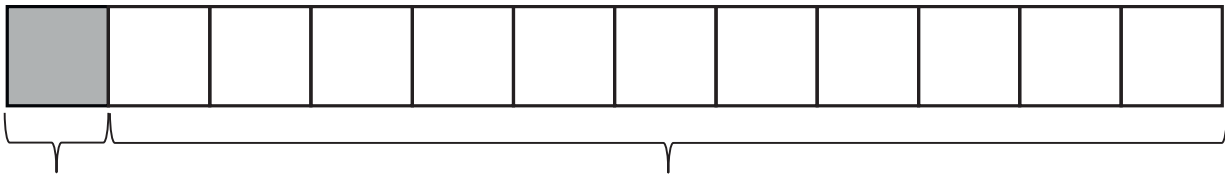
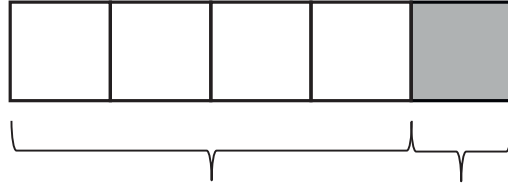
- 3 fourths

8.



- 6 sevenths

9. Each strip represents 1 whole. Write a fraction to label the shaded and unshaded parts.



10. Carlia finished $\frac{1}{4}$ of her homework on Saturday. What fraction of her homework has she not finished? Draw and explain.

11. Jerome cooks 8 cups of oatmeal for his family. They eat $\frac{7}{8}$ of the oatmeal. What fraction of the oatmeal is uneaten? Draw and explain.