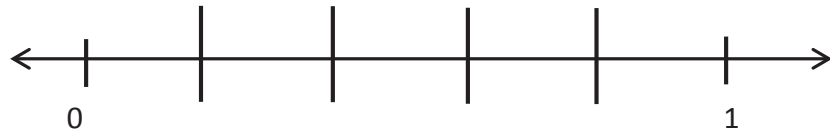
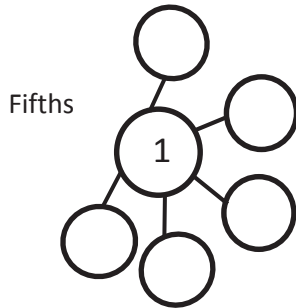


Name \_\_\_\_\_

Date \_\_\_\_\_


1. Complete the number bond as indicated by the fractional unit. Partition the number line into the given fractional unit, and label the fractions. Rename 0 and 1 as fractions of the given unit.



Sixths



Sevenths



Eighths

