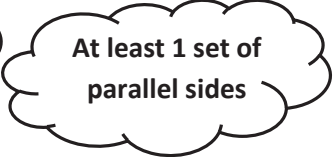
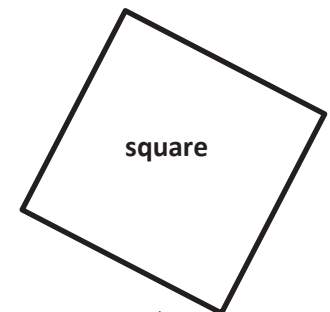
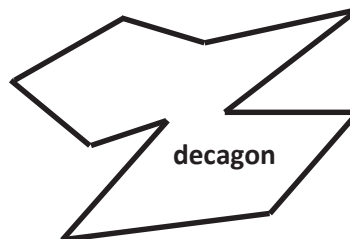
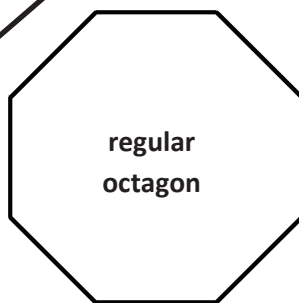
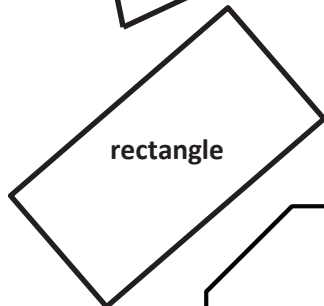



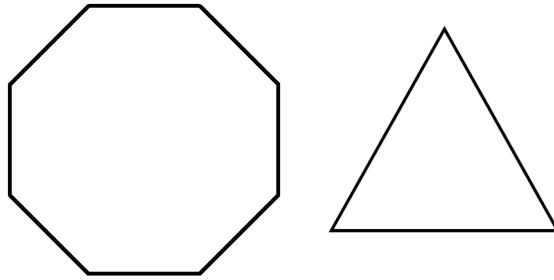
Name \_\_\_\_\_

Date \_\_\_\_\_

1. Match the polygons with their appropriate clouds. A polygon can match to more than 1 cloud.

All sides are equal.All sides are not equal.At least 1 right angleAt least 1 set of parallel sides

2. The two polygons below are regular polygons. How are these polygons the same? How are they different?



3. Lucia drew the polygons below. Are any of the polygons she drew regular polygons? Explain how you know.

