

Name: \_\_\_\_\_

Ordering Numbers: 2-Digit

## Ordering Numbers

Rewrite each list of numbers in order, from least to greatest.

a. 

15	21	12	18
----	----	----	----

 \_\_\_\_\_, \_\_\_\_\_, \_\_\_\_\_, \_\_\_\_\_

b. 

56	71	47	50
----	----	----	----

 \_\_\_\_\_, \_\_\_\_\_, \_\_\_\_\_, \_\_\_\_\_

c. 

36	6	37	31
----	---	----	----

 \_\_\_\_\_, \_\_\_\_\_, \_\_\_\_\_, \_\_\_\_\_

d. 

88	81	98	18
----	----	----	----

 \_\_\_\_\_, \_\_\_\_\_, \_\_\_\_\_, \_\_\_\_\_

e. 

39	48	45	41
----	----	----	----

 \_\_\_\_\_, \_\_\_\_\_, \_\_\_\_\_, \_\_\_\_\_

f. 

44	22	42	24
----	----	----	----

 \_\_\_\_\_, \_\_\_\_\_, \_\_\_\_\_, \_\_\_\_\_

❖ In the box below, write four numbers. Have a friend rewrite them in order from least to greatest.

--

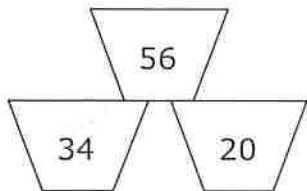
 \_\_\_\_\_, \_\_\_\_\_, \_\_\_\_\_, \_\_\_\_\_

Name: \_\_\_\_\_

## Ordering Numbers Least to Greatest

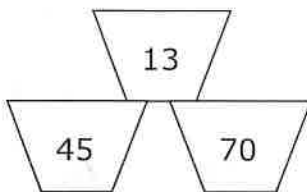
**Directions:** Look at each set of numbers and put them in the correct order from least to greatest.

1.



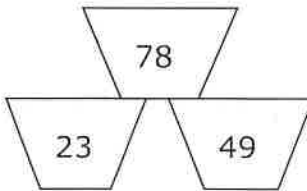
\_\_\_\_\_ < \_\_\_\_\_ < \_\_\_\_\_

2.



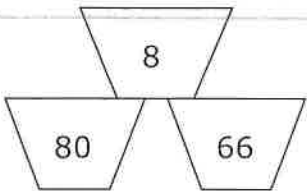
\_\_\_\_\_ < \_\_\_\_\_ < \_\_\_\_\_

3.



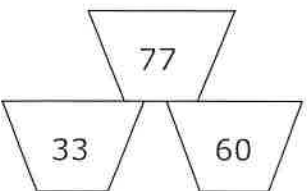
\_\_\_\_\_ < \_\_\_\_\_ < \_\_\_\_\_

4.



\_\_\_\_\_ < \_\_\_\_\_ < \_\_\_\_\_

5.



\_\_\_\_\_ < \_\_\_\_\_ < \_\_\_\_\_

Name: \_\_\_\_\_

Ordering Numbers: 3-Digit

## Ordering Numbers

Rewrite each list of numbers in order, from least to greatest.

a. 

115	121	119	125
-----	-----	-----	-----

 \_\_\_\_\_, \_\_\_\_\_, \_\_\_\_\_, \_\_\_\_\_

b. 

423	432	342	344
-----	-----	-----	-----

 \_\_\_\_\_, \_\_\_\_\_, \_\_\_\_\_, \_\_\_\_\_

c. 

757	755	577	79
-----	-----	-----	----

 \_\_\_\_\_, \_\_\_\_\_, \_\_\_\_\_, \_\_\_\_\_

d. 

210	340	304	200
-----	-----	-----	-----

 \_\_\_\_\_, \_\_\_\_\_, \_\_\_\_\_, \_\_\_\_\_

e. 

160	60	163	130
-----	----	-----	-----

 \_\_\_\_\_, \_\_\_\_\_, \_\_\_\_\_, \_\_\_\_\_

f. 

445	145	545	454
-----	-----	-----	-----

 \_\_\_\_\_, \_\_\_\_\_, \_\_\_\_\_, \_\_\_\_\_

❖ In the box below, write four 3-digit numbers. Have a friend rewrite them in order, from least to greatest.

--

 \_\_\_\_\_, \_\_\_\_\_, \_\_\_\_\_, \_\_\_\_\_

Name: \_\_\_\_\_

Ordering Numbers: 4-Digit

## Ordering Numbers

Rewrite each list of numbers in order, from least to greatest.

a. 1,105 1,150 1,501 1,115 1,550

\_\_\_\_\_

b. 6,770 6,707 6,070 7,007 867

\_\_\_\_\_

c. 2,998 8,928 9,009 8,298 8,802

\_\_\_\_\_

d. 3,407 3,000 4,307 4,407 3,337

\_\_\_\_\_

- ❖ In the box below, write five 4-digit numbers. Have a friend rewrite them in order, from least to greatest.

\_\_\_\_\_